


Count and find the correct number.




Place the counters here.

Place the number here.



How many altogether? (addition).



Empty rectangular box for the first addend.

+

Empty rectangular box for the second addend.


=

Empty rectangular box for the sum.

Empty rectangular box for the first addend.

Empty rectangular box for the second addend.

Empty rectangular box for the sum.



How many left? (subtraction).



-



=

